






Name _____

Geologic Blocks: Unconformities Worksheet

	<p>___ Layers Tilted</p> <p>___ Upper Layers Deposited</p> <p>___ Erosion</p> <p>___ Lower Layers Deposited</p>	<ol style="list-style-type: none">1.2.3.4.
<p>U-1 Draw Unconformity</p>	<p>U-2 Order Events</p>	<p>U-3 List Events</p>
	<ol style="list-style-type: none">1.2.3.4.5.	
<p>U-4 Draw Unconformity</p>	<p>U-5 List Events</p>	<p>U-6 Draw Unconformity</p>





- 1.
- 2.
- 3.
- 4.
- 5.



U-7 Identify Layers/Draw Unconformity

U-8 Order Events

U-9 Draw Unconformity



U-10 Describe and Order

U-11 Draw Block – Practice

U-11 Draw Block – Final