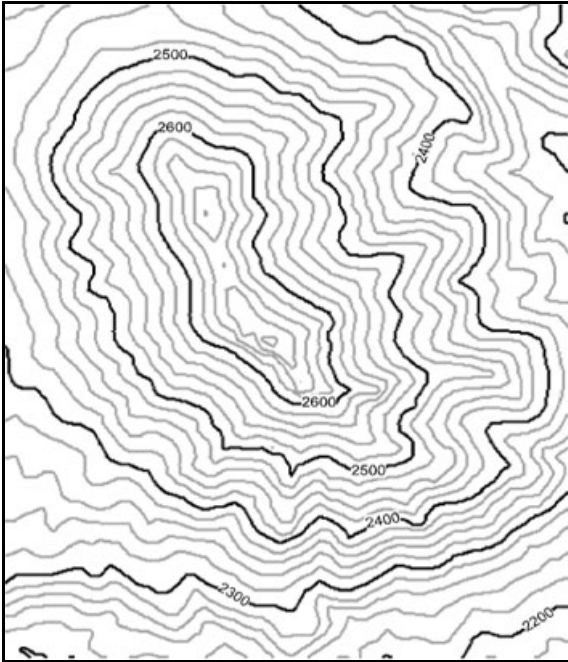


Name _____

You will tear out this page and turn it in


CHAPTER 1 Worksheet 1A. Work through the Visualizing Topography module on the computer. Put your observations and answers in the appropriate spaces below.

By now you have a picture in your mind of what this landscape looks like. In the space provided below, write a description of this landscape so that someone who had not seen it before could imagine it in their mind.



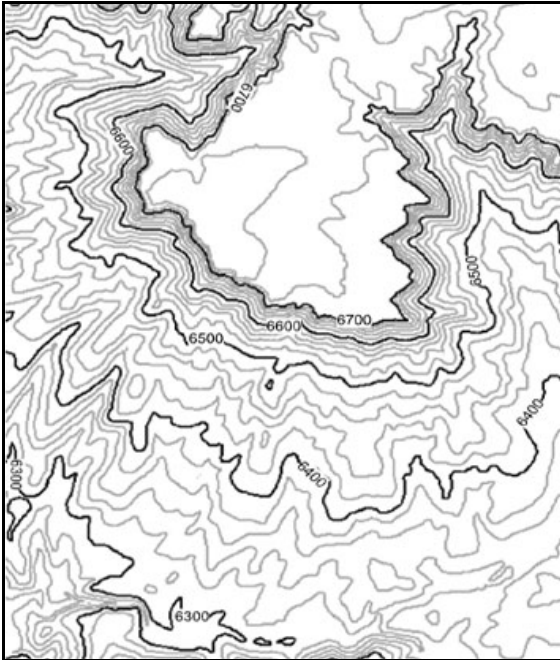
Landscape description:

By now you have a picture in your mind of what this landscape looks like. In the space provided below, write a description of this landscape so that someone who had not seen it before could imagine it in their mind.



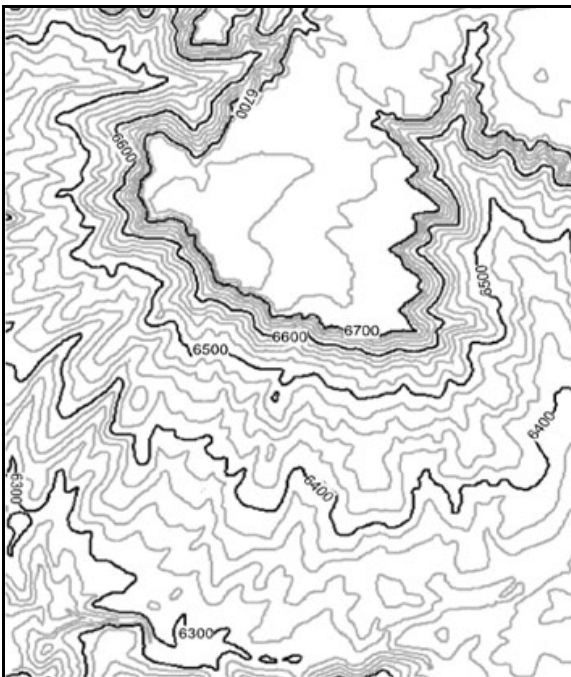
Landscape description:

Worksheet 1A (cont.) By now you have a picture in your mind of what this landscape looks like. In the space provided below, write a description of this landscape so that someone who had not seen it before could imagine it in their mind. For this map, you will not be provided with an example of how you might describe this landscape.



Landscape description:

By now you have a picture in your mind of how this landscape floods. In the space provided below, write a description of this landscape so that someone who had not seen it flood before could imagine it flooding in their mind.

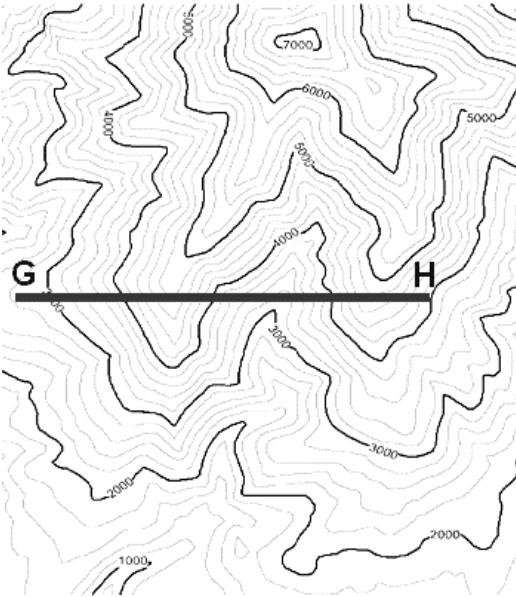


Landscape flooding description:

Name _____

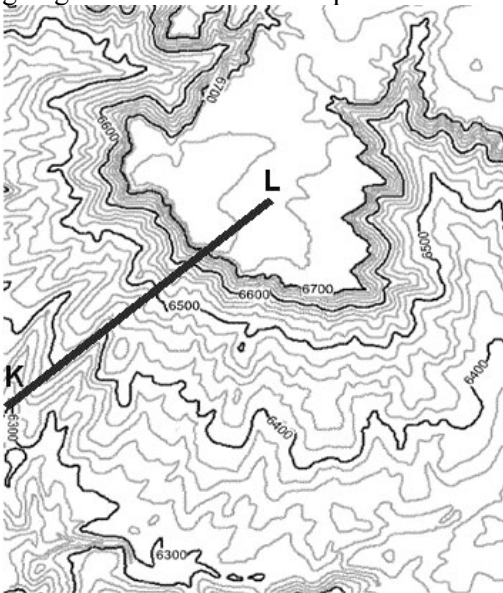
You will tear out this page and turn it in

Try to envision walking from G to H., especially when you are going up hill and when you are going downhill. Sketch the profile from G to H in the space provided to the right of the map.



Profile from G to H:

Try to envision walking from K to L., especially when you are going up hill and when you are going downhill. Sketch the profile from K to L in the space provided to the right of the map.



Profile from K to L:

Worksheet 1C follows this page

Worksheet 1D. Look at the numbered features on the topographic map on the back of this page (Figure W1-1). Identify the numbered topographic features in the table below. Possibilities include butte (hill with steep sides), ridge, mesa (steep hill with flat top), narrow canyon, flat area, cliff, depression, mountain range, broad valley.

Feature Number	1	2	3	4	5	6
Type of Feature						